

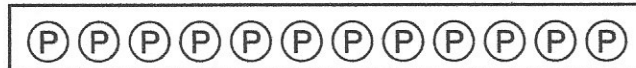
HOME LINK
5•7**Comparing Amounts of Money**

Family Note Children are beginning to solve number stories in which they find how much more (or less) one number is than another. This is called the *difference* between the two numbers.


Help your child line up the pennies in two rows and pair pennies in the top row with pennies in the bottom row. Have your child make as many pairs as possible. The extra pennies that could not be paired represent the difference.

Please return this Home Link to school tomorrow.

1. Bart

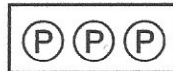


Perry

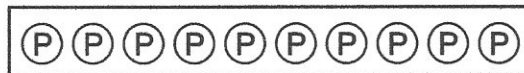


Who has more? _____ How much more? _____ ¢

2. Tricia



Martha



Who has more? _____ How much more? _____ ¢

3. Franklin has 17 pennies.

Maria has 25 pennies.

Who has more? _____ How much more? _____ ¢

Practice

4. Circle the tens place.

115

80

55

17